

Name _____

Period _____

Date _____

AP: CHAPTER 12: CELL CYCLE

1. What is meant by the concept that cells go through a cell cycle?

2. What are the key roles of cell division?

3. What is the significance of chromosome replication?

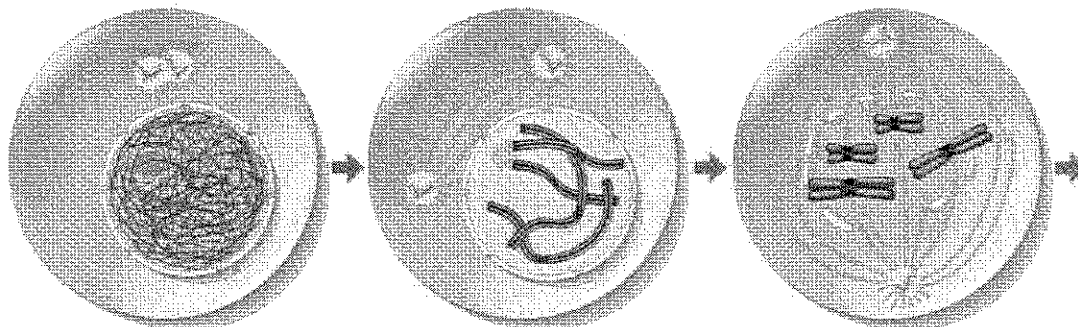
4. Sketch and label replicated chromosomes.

5. List the phases of the cell cycle with a brief description of what occurs in each phase.

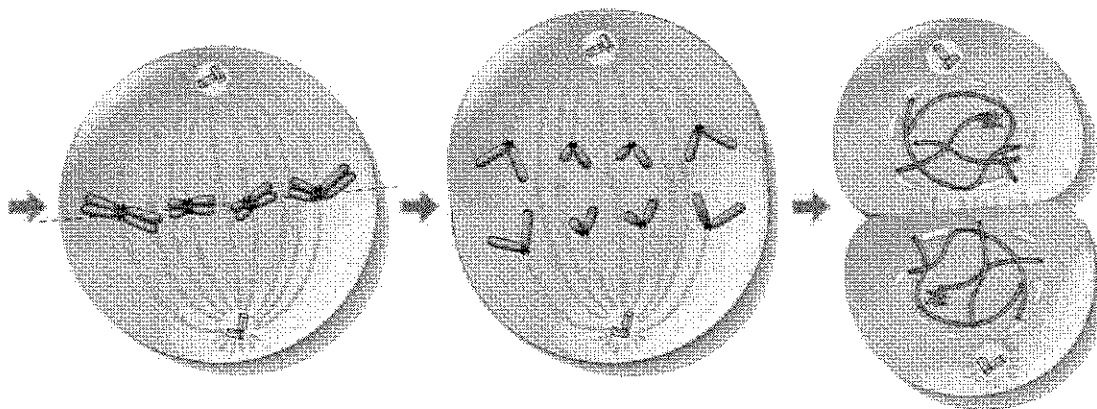
- a. _____
- b. _____
- c. _____
- d. _____
- e. _____

Name _____

6. Label the stages and key features of each stage.



_____	_____	_____
_____	_____	_____
_____	_____	_____
_____	_____	_____
_____	_____	_____



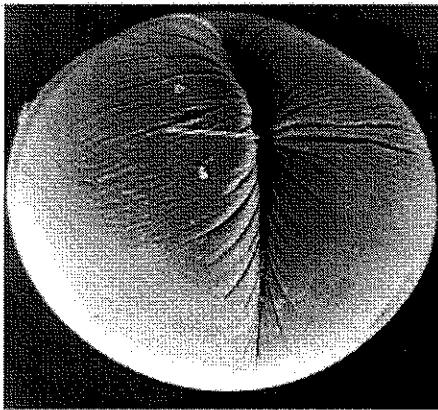
_____	_____	_____
_____	_____	_____
_____	_____	_____
_____	_____	_____
_____	_____	_____

Name _____


7. How does the spindle apparatus distribute chromosomes to the daughter cells?

8. What is the role of the kinetochores and the microtubules?

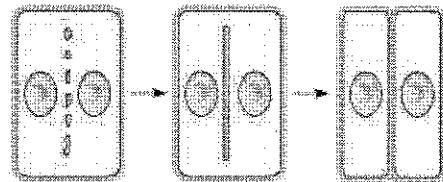
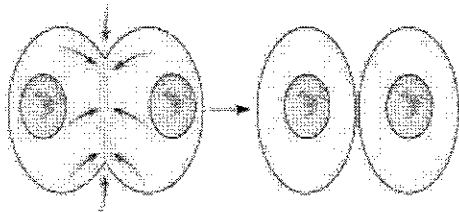
9. How does cytokinesis differ in animal and plant cells? Label the diagrams below.



100 μm



1 μm



Name _____

10. Eukaryotic mitosis is thought to have evolved from _____

11. Why is the regulation of the cell cycle critical to normal cells?

12. What is the G1 checkpoint and where does it fit into the cycle?

13. What evidence is there that regulation is chemical in nature?

14. Identify the role of the following in the cell cycle clock:

a. Kinase _____

b. Cyclin _____

c. CDKs _____

15. Describe the mechanism for regulating the passage of the cell into anaphase.

Name _____

16. Describe what triggers mitosis from G2.

17. What is the role of ubiquitin?

18. Describe a model for an external signal for growth.

19. What happens when cancer develops?

20. What is the role of p53?

Name _____

Period _____

Date _____

AP: CHAPTER 16: THE MOLECULAR BASIS OF INHERITANCE

1. After Morgan and fellow scientists developed the Chromosomal Theory of Inheritance, the search was on for the chemical mechanism of inheritance. What are the two components of the chromosome?

2. From initial logic, which component would be the most likely candidate for the genetic material and why?

3. What did Griffith, Avery, and others accomplish with bacteria?

4. Define transformation. _____

5. What did the experiments done by Alfred Hershey and Martha Chase show?

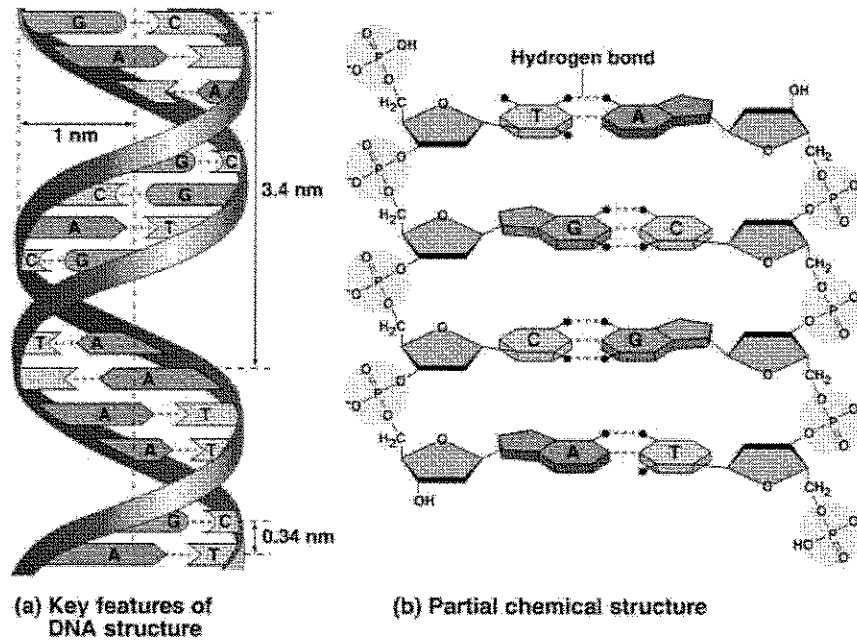
6. What are Chargaff's rules?

7. If a species has 35% adenine in its DNA, determine the percent of the other three bases.

Name _____

8. What was the role of Maurice Wilkins and Rosalind Franklin in determining the structure of DNA?

9. Use the diagram to describe the structure of DNA. Include several comments.



10. What is the advantage of the double stranded aspect of the DNA? _____

11. Which model of DNA replication is accepted? _____

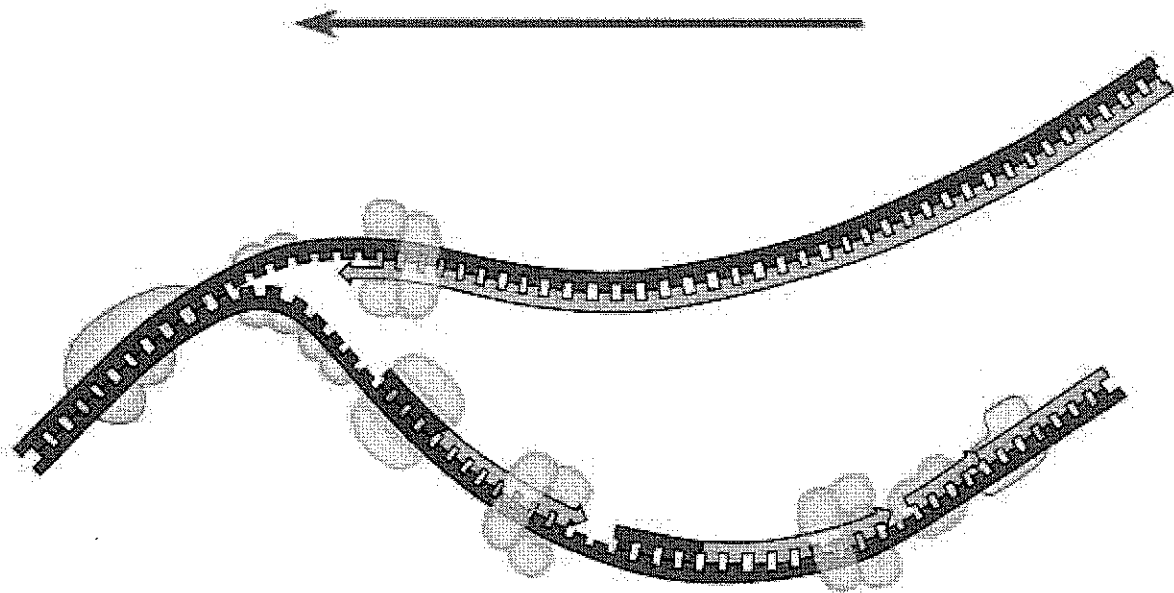
Name _____

12. What happens at the DNA replication fork?

13. Make a list of the enzymes involved in replication and their role.

14. Why does the DNA have to add nucleotides in the 5' to 3' direction?

15. Label the diagram of DNA replication. Include the directions and the terms.



Name _____

16. Describe the "priming of the DNA" before replication. _____

17. List some of the steps involved in DNA repair. _____

18. What is the problem that occurs at the ends of the chromosome during replication?

19. What is a telomere and its role in cell division. _____

20. Why was there no selection pressure for prokaryotes to evolve a telomere-like solution on their chromosome? _____

21. Why is telomerase an active area in cancer research? _____
